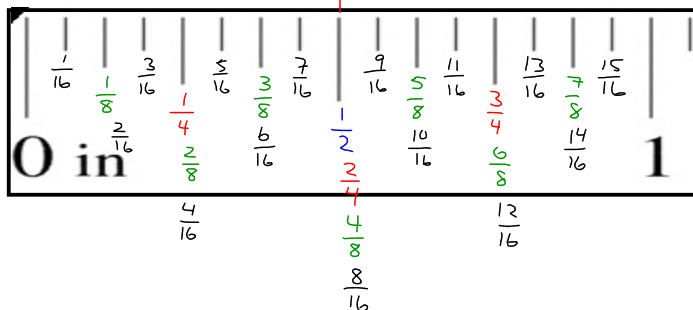


1.4B Reading a Tape Measure (feet & inches)

Label the half, quarter, eighth, and sixteenths measurements of this "big inch".



Feet and inches are part of the **Imperial Measure System!**

**Countries using imperial only**

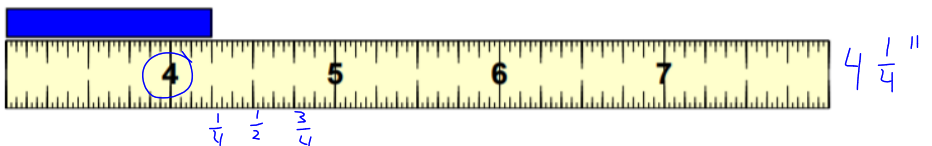
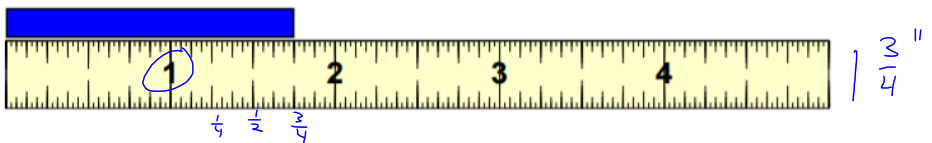
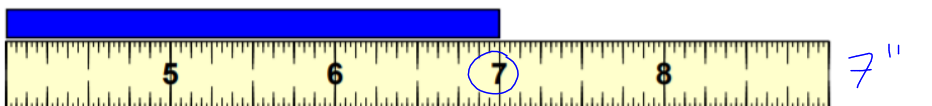
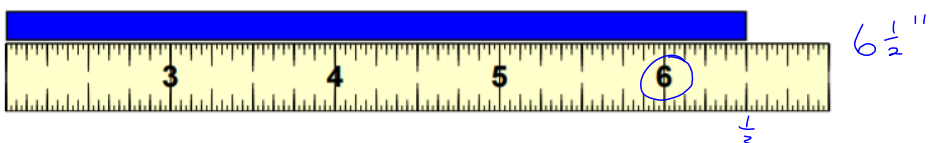
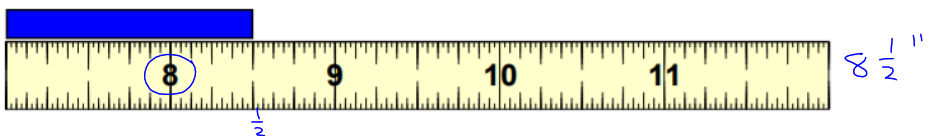
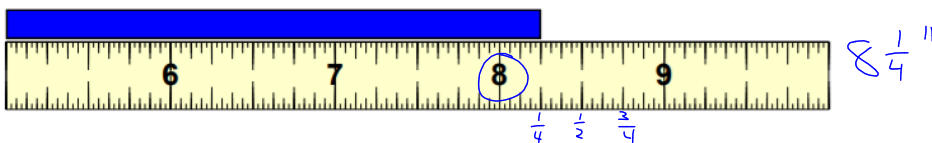
United States	Myanmar	Liberia
		

Canada, India, United Kingdom, Australia, New Zealand, Hong Kong and Ireland still use a combination of metric and imperial!

Hong Kong uses a third system called the **Chinese Units of Measurement of the Qing Empire.**

" means inches

Ex. 1 Write the measurement of each line in inches.



1 foot = 12 inches
--------------------

Feet	1'	2'	3'	4'	5'	6'	7'	8'
Inches	12"	24"	36"	48"	60"	72"	84"	96"

' means feet

Ex. 2 Write the measurement in feet and inches.

$6' = 72''$